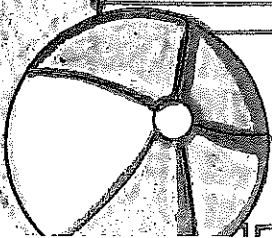

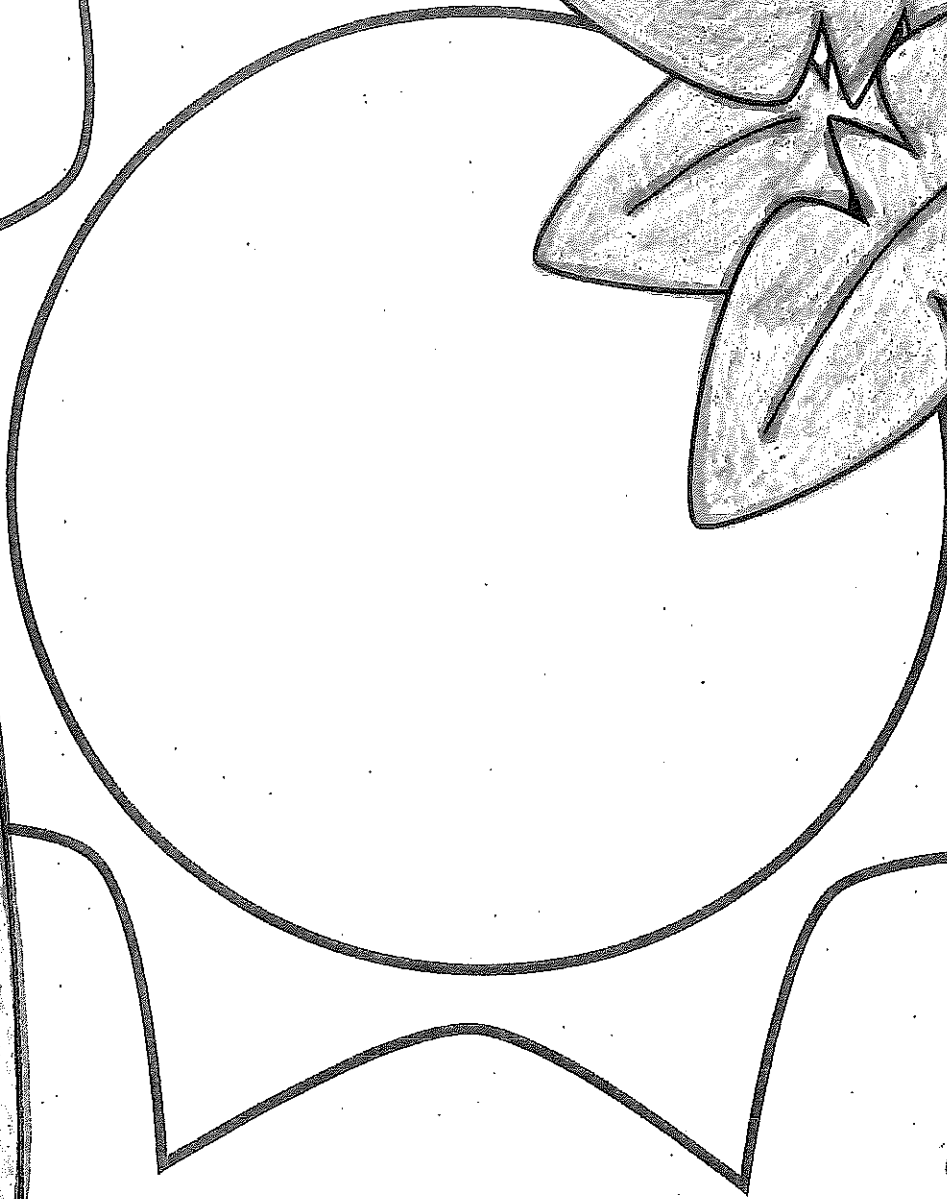



Rising 3rd Grade
Summer Packet



This packet belongs to:



Parent Letter

Parents,

This packet was created to help your child retain what they learned during second grade. The pages were set up where your child will do a language arts and math sheet three times a week. The packet will give students the opportunity to practice writing, reading comprehension, addition, subtraction, and many more skills that were covered in the second grade. It should not take your child more than 20-30 minutes to complete one front and back sheet.

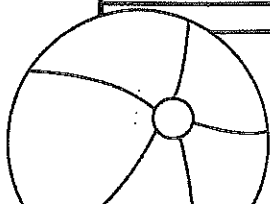
For this packet to work best, it is important to only do what is allotted for that week. Finishing the entire packet in one week will not help your child retain the information throughout the summer. It is also important to allow your child to work independently and then review the pages with them when completed. Each page is structured to encourage your child to work independently.

There is also a separate reading assignment included in this packet for your child to complete.



On Book Day, please have your child return the completed reading assignment and the packet to their 3rd grade homeroom teacher.

Thank you for taking an active role in your child's education.

Have a great summer!



Week 1: Day 1



Syllables

Put the 6 words in the correct box.

backpack family castle
surfer elephant ladybug

2 syllables

3 syllables

ABC Order

Put the 10 words in ABC Order.

bag	rat
cat	lag
bit	tug
mop	top
fat	pig

1. _____
2. _____
3. _____
4. _____
5. _____
6. _____
7. _____
8. _____
9. _____
10. _____

Adverbs

Circle the adverb in each of the sentences.

The girl runs quickly.

My dog barks loudly.

My friend whispers softly.

Nouns

Circle the people, places, & things.

house zoo

an him

boy who

box shovel

vest the

Prefixes

Circle the prefix in each word.

misstep

recall

unhappy

retell

preview

Sentence Construction

Correct the sentences below. Rewrite them correctly.



1. jacks hat wuz blue and green

1. _____

2. he haz a bucket

2. _____

Week 1: Day 1



Addition

Find the sums for each problem below.

34

63

85

+24

+24

+48

Subtraction

Find the difference for each problem below.

51

79

66

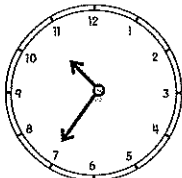
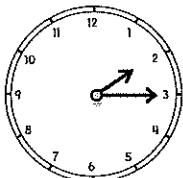
- 23

- 48

- 35

Time

Write the times shown on the clocks.



:

:

Shapes

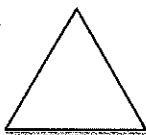
Answer the questions about the shapes below.

1.



— vertices
— faces
— edges

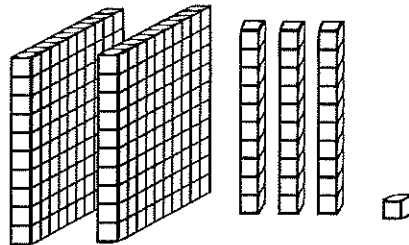
2.



— sides
— vertices

Place Value

Write the answer in expanded form.



_____ + _____ = _____

Word Problem

Answer the problem below. Show your work.

The girl had 12 apples, 6 oranges, and 8 bananas. How much fruit did she have in all?

add

subtract

_____ □ _____ □ _____ = _____

Fact Families

Using the numbers below, create a fact family.

10

15




25

_____ + _____ = _____

_____ + _____ = _____


_____ - _____ = _____

_____ - _____ = _____



Reading Comprehension

Zack and Max went to the beach with their parents. When they got there Zack wanted to play in the sand. Max wanted to go in the water. They decided to flip a coin. Zack called heads and Max called tails. The coin landed on heads so the boys built a sand castle first. After they finished building the sand castle, the boys ran into the water. They saw lots of little fish. When they got out of the water, they picked up shells. Zack and Max had a great day at the beach!



Read the story above. Use the story to answer the questions.

1. Where are Zack and Max?

3. How did the boys solve their problem?

2. What was the problem?

4. How would you solve the problem?

Sentence Construction


Correct the sentences below. Rewrite them correctly.

1. pam and sam fund shels



1. _____

2. did she wear the saras hat

2. _____



Week 1: Day 2



Addition

Find the sums for each problem below.

43

84

30

+55

+19

+36

Subtraction

Find the difference for each problem below.

73

95

38

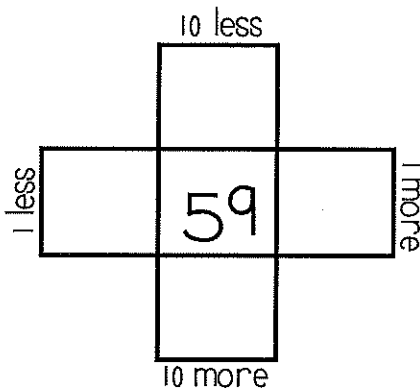
- 37

- 53

- 18

Multiples of 10


Write in the missing numbers..



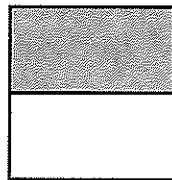
Fractions

Answer the questions about the fractions below.

1.

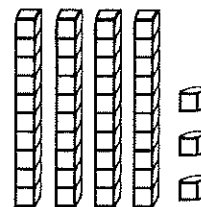


2.



Place Value

Write how many tens and ones you have for each problem and write the problem in expanded form.



___ tens ___ ones =
 ___ + ___ = ___

Word Problem

Answer the problem below. Show your work.

Sam has 36 pencils. He gives some away. He has 20 left. How many pencils did he give away?

add

subtract

___ □ ___ = ___

Fact Families

Using the numbers below, create a fact family.

18 + ___ = 30

12 + 18 = ___

30 - ___ = 18

___ - 18 = 12

Week 1: Day 3

Dictionary Skills

Read the definitions. Decide which definition was used in the sentence.

duck

1. a bird that quacks (noun)
2. to get out of the way of something (verb)

The duck swam in the lake.

- Definition 1
- Definition 2

ABC Order

Put the 10 words in ABC Order.

rate	bale
tale	male
lake	fate
date	pale
file	tile

1. _____
2. _____
3. _____
4. _____
5. _____
6. _____
7. _____
8. _____
9. _____
10. _____

Adverbs

Circle the adverb in each of the sentences.

We walked home slowly.

The snow fell lightly.

Ben cut paper carefully.

Verbs

Circle the verbs (action words) below.

run friend

walk talked

and cut

one it

called write

Compound Words

Circle the compound words below.

football following

crazy fireworks

walked butterfly

himself couches

carrying sunshine

Sentence Construction

Correct the sentences below. Rewrite them correctly.



1. did jessica may and tim go to the store

1. _____

2. my birthday wuz march 8 2013

2. _____

Week 1: Day 3



Addition

Find the sums for each problem below.

$$\begin{array}{r} 321 \\ +446 \\ \hline \end{array}$$

$$\begin{array}{r} 73 \\ +54 \\ \hline \end{array}$$

$$\begin{array}{r} 40 \\ +29 \\ \hline \end{array}$$

Subtraction

Find the difference for each problem below.

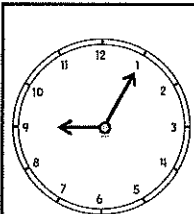
$$\begin{array}{r} 512 \\ -253 \\ \hline \end{array}$$

$$\begin{array}{r} 48 \\ -26 \\ \hline \end{array}$$

$$\begin{array}{r} 35 \\ -18 \\ \hline \end{array}$$

Time

Write the times shown on the clocks.



:

:

Counting

Fill in the missing numbers.

102, 103, _____, _____, 106

140, _____, _____, 170, _____

81, 82, 83, _____, _____, _____

_____, _____, 45, 50, _____

Money

Count the coins. Write your answer in the box.





Word Problem

Answer the problem below. Show your work.

Bella caught the ball 15 times yesterday and 23 times today.
How many times did Bella catch the ball in all?

add

subtract

_____ □ _____ = _____



Graphing

Use the graph below to answer the questions.

	2	4	6	8
Cats				
Dogs				

- How many kids chose dogs? _____
- How many kids chose cats? _____
- How many kids voted in all? _____

Week 2: Day 1



Syllables

Put the 6 words in the correct box.

potato starfish basketball

hamburger Frisbee sunshine

2 syllables

3 syllables

ABC Order

Put the 10 words in ABC Order.

dog	lizard
snake	ferret
hamster	bird
rabbit	horse
turtle	cat

1. _____
2. _____
3. _____
4. _____
5. _____
6. _____
7. _____
8. _____
9. _____
10. _____

Adverbs

Circle the adverb in each of the sentences.

The child waited patiently.

The band played badly.

He ate it quickly.

Adjectives

Find the describing words.

one talk

pretty hot

barn friend

bright cup

chair blue

Suffixes

Circle the suffix in each word.

useless

durable

bigger

badly

helpless

Sentence Construction

Correct the sentences below. Rewrite them correctly.



1. the flowers werent growing

1. _____

2. april come before may

2. _____

Week 2: Day 1



Addition

Find the sums for each problem below.

$$\begin{array}{r} 563 \\ +271 \\ \hline \end{array}$$

$$\begin{array}{r} 80 \\ +69 \\ \hline \end{array}$$

$$\begin{array}{r} 31 \\ +18 \\ \hline \end{array}$$

Subtraction

Find the difference for each problem below.

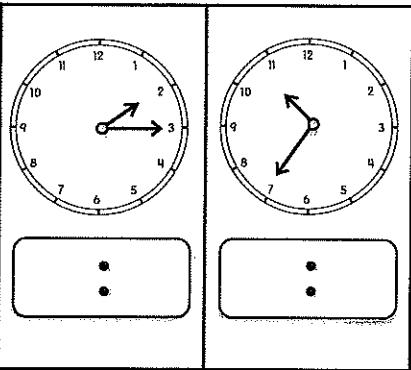
$$\begin{array}{r} 480 \\ -135 \\ \hline \end{array}$$

$$\begin{array}{r} 39 \\ -29 \\ \hline \end{array}$$

$$\begin{array}{r} 79 \\ -38 \\ \hline \end{array}$$

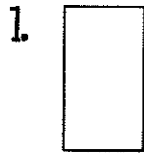
Time

Write the times shown on the clocks.

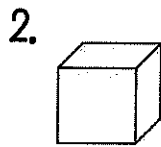


Shapes

Answer the questions about the shapes below.



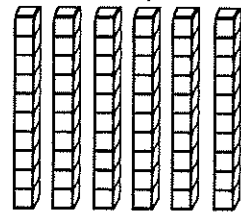
___ sides
___ corners



___ vertices
___ faces
___ edges

Place Value

Write how many tens and ones you have for each problem and write the problem in expanded form.



___ tens ___ ones =
___ + ___ = ___

Word Problem

Answer the problem below. Show your work.

April had 12 pens. Max had 14 pens.
Sam had 16 pens. How many pens
did they have altogether?

add

subtract


$$\square \square \square = \square$$

Fact Families

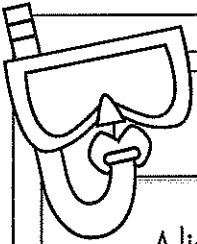

Using the numbers below, create a fact family.

37 24 13

$$\begin{array}{r} _ + _ = _ \\ _ + _ = _ \\ _ - _ = _ \\ _ - _ = _ \end{array}$$




Week 2: Day 2



Reading Comprehension

Alicia and Pam like to go to school. They get to learn new things and they get to see their friends. Both of them are in second grade with Mrs. Johnson. Alicia's favorite subject is science. She likes to learn about plants. Pam's favorite subject is math. She likes to see how fast she can add. Both of them love recess. Alicia likes the swings and Pam likes the slide. Alicia and Pam think that school is a lot of fun.



Read the story above. Use the story to answer the questions.

1. Why do you think that Alicia's favorite subject is science?

3. How are Alicia and Pam alike?

2. Why does Pam like math?

4. How are Alicia and Pam different?

Sentence Construction

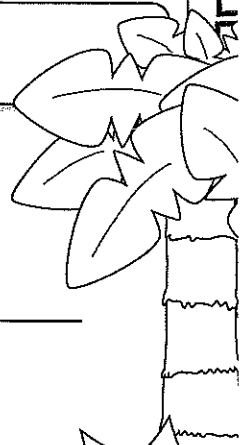
Correct the sentences below. Rewrite them correctly.


1. how old is megans aunt

1. _____


2. didnt lesley help you find the dog

2. _____





Week 2: Day 2



Addition

Find the sums for each problem below.

526	39	56
$+285$	$+23$	$+27$
<input type="text"/>	<input type="text"/>	<input type="text"/>

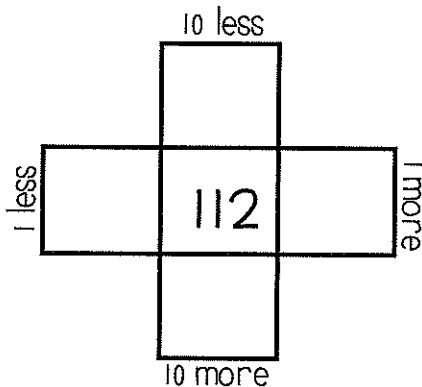
Subtraction

Find the difference for each problem below.

734	31	76
-246	-8	-29
<input type="text"/>	<input type="text"/>	<input type="text"/>

Multiples of 10

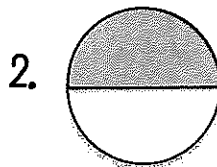
Write in the missing numbers.



Fractions

Answer the questions about the fractions below.





Odd/Even

Circle the odd numbers.

- | | |
|----|----|
| 44 | 31 |
| 98 | 80 |
| 75 | 53 |
| 32 | 65 |

Word Problem

Answer the problem below. Show your work.

Ann had 18 pieces of candy. She shared them with 3 friends. How many pieces did each friend get?

Fact Families

Using the numbers below, create a fact family.


<input type="text"/>	<input type="text"/>	<input type="text"/>
----------------------	----------------------	----------------------

$19 + \underline{\quad} = 53$

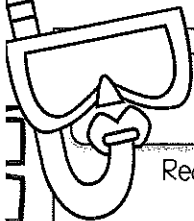

$34 + 19 = \underline{\quad}$

$53 - \underline{\quad} = 34$

$\underline{\quad} - 34 = 19$



Week 2: Day 3



Dictionary Skills


Read the definitions. Decide which definition was used in the sentence.

ring

- a round object you wear on your finger(noun)
- the sound a phone makes(verb)

My ring is on my left hand.

- Definition 1
- Definition 2

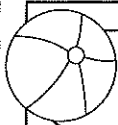


ABC Order

Put the 10 words in ABC Order.

grapes	orange
apple	pear
mango	fruit
banana	melon
cherry	berry

- _____
- _____
- _____
- _____
- _____
- _____
- _____
- _____
- _____
- _____



Pronouns

Circle the pronoun that can replace the underlined words.

The kids ran outside.

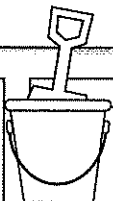
They

She

Tim walked home.

He

Him



Proper Nouns

Circle the words that need capital letters.

april

kid

monday

zack

too

lamp

christmas

may

light

friend



Compound Words

Circle the compound words below.

hamburger

funny

talking

popcorn

surfer

airport

sunflower

ladder

calling

firefly

Sentence Construction

Correct the sentences below. Rewrite them correctly.


1. robin likes dogs cats fishes and rabbits

1. _____


2. thanksgiving is in november

2. _____





Week 2: Day 3



Addition

Find the sums for each problem below.

$$\begin{array}{r} 3321 \\ +5746 \\ \hline \end{array}$$

$$\begin{array}{r} 3971 \\ +2844 \\ \hline \end{array}$$

Subtraction

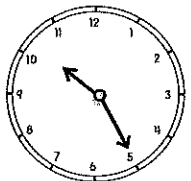
Find the difference for each problem below.

$$\begin{array}{r} 7512 \\ - 283 \\ \hline \end{array}$$

$$\begin{array}{r} 9325 \\ - 6185 \\ \hline \end{array}$$

Time

Write the times shown on the clocks.



Counting

Fill in the missing numbers.

600, 700, ____, ____, 1000

____, ____, 220, 230, ____

50, ____, 52, ____, ____

____, 85, ____, ____, 100

Money

Count the coins. Write your answer in the box.



Word Problem

Answer the problem below. Show your work.

Max found 18 seashells. He shared them with 6 friends. How many shells did each of his friends get?



Graphing

Use the graph below to answer the questions.

	2	4	6	8	10
Pizza	■	■	■	■	■
Burger	■	■	■	■	■

- How many kids chose pizza? ____
- How many kids chose burgers? ____
- How many kids voted in all? ____

Week 3: Day 1



Syllables

Put the 6 words in the correct box.

horses garden candy
grasshopper dinosaur notebook

2 syllables

3 syllables

ABC Order

Put the 10 words in ABC Order.

shovel	ocean
bucket	flip flops
shell	towel
popsicle	sun
waves	beach

1. _____
2. _____
3. _____
4. _____
5. _____
6. _____
7. _____
8. _____
9. _____
10. _____

Pronouns

Circle the pronoun that can replace the underlined words.

His mom made us pizza.

Her

She

I called Max on the phone.

he

him

Adjectives

Find the describing words.

cloudy	big
eyes	nice
floor	and
call	short
soft	carpet

Root Words

Circle the root words below.

tell	tells
bigger	big
smiling	smile
eat	eating
sleep	sleeps

Sentence Construction

Correct the sentences below. Rewrite them correctly.



1. stephanie couldnt go to walmart

1. _____

2. meg wrote a letter on april 1, 2011

2. _____

Week 3: Day 1



Addition

Find the sums for each problem below.

$$\begin{array}{r} 541 \\ +249 \\ \hline \end{array}$$

$$\begin{array}{r} 83 \\ +34 \\ \hline \end{array}$$

$$\begin{array}{r} 60 \\ +37 \\ \hline \end{array}$$

Subtraction

Find the difference for each problem below.

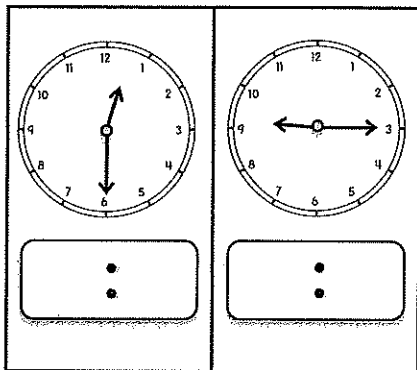
$$\begin{array}{r} 768 \\ -256 \\ \hline \end{array}$$

$$\begin{array}{r} 66 \\ -36 \\ \hline \end{array}$$

$$\begin{array}{r} 42 \\ -28 \\ \hline \end{array}$$

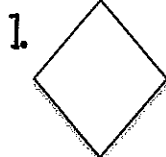
Time

Write the times shown on the clocks.

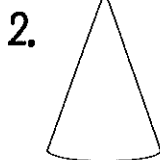


Shapes

Answer the questions about the shapes below.



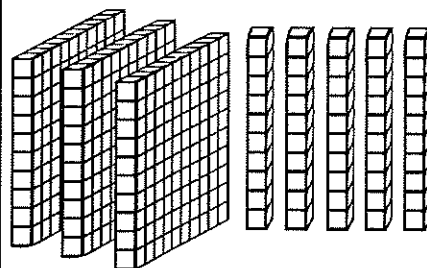
___ sides
___ vertices



___ vertices
___ faces
___ edges

Place Value

Write the answer in expanded form.



+ _____ = _____

Word Problem

Answer the problem below. Show your work.

Cam had 10 baseballs. Max had 26 baseballs. Sam had 13 baseballs. How many baseballs did they have altogether?

add

subtract

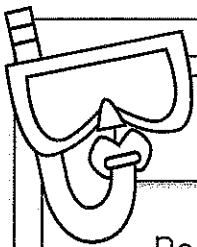


_____ _____ = _____

Fact Families

Using the numbers below, create a fact family.

26 42 68

____ + ____ = ____
 ____ + ____ = ____
 ____ - ____ = ____
 ____ - ____ = ____



Reading Comprehension

Ben is my dog. He likes to bark at big trucks. He likes to catch his baseball. When he gets hungry, Ben pushes his dish to my feet. One day, I went outside to get the mail. When I came back inside I could not find Ben. I looked under my bed, in the bathroom, and in the kitchen. He was not in any of those places. All of a sudden, I heard a scratching noise and a bark. I ran to the door and opened it. Ben had followed me outside. I gave him a treat for waiting for me. Ben is a great dog!



Read the story above. Use the story to answer the questions.

1. What was the problem?

2. How would you search for your dog if it was missing?

3. Name two places the boy looked for Ben.

4. Where was Ben?

Sentence Construction


Correct the sentences below. Rewrite them correctly.

1. alicia cant eat onions beans or eggs



1.

2. did you see the boys horse run

2.



Week 3: Day 2



Addition

Find the sums for each problem below.

813

22

76

+176

+30

+39

Subtraction

Find the difference for each problem below.

833

83

21

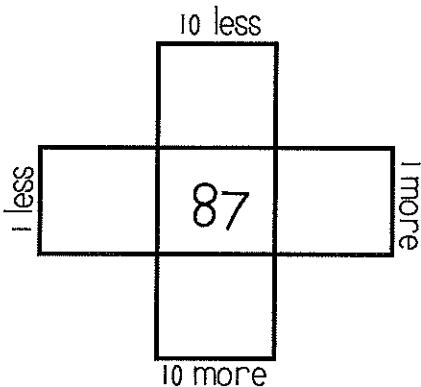
-457

-29

-9

Multiples of 10


Write in the missing numbers.




Fractions

Answer the questions about the fractions below.

1.



2.



Odd/Even

Circle the even numbers.

62

40

85

57

48

37

63

92

Word Problem

Answer the problem below. Show your work.

Kristen picked up 35 shells. Her sister picked up 16 shells. How many more shells did Kristen pick up than her sister?

add

subtract

=

Fact Families

Using the numbers below, create a fact family.

$16 + \underline{\quad} = 35$

$16 + 19 = \underline{\quad}$

$35 - \underline{\quad} = 16$

$\underline{\quad} - 16 = 19$

Week 3: Day 3

Dictionary Skills

Read the definitions. Decide which definition was used in the sentence.

bat

- an object used to hit a ball(noun)
- an animal that flies at night(noun)

The bat lives in a cave.

- Definition 1
- Definition 2

ABC Order

Put the 10 words in ABC Order.

rock	luck
sock	dock
lock	pack
tack	mock
crock	duck

- _____
- _____
- _____
- _____
- _____
- _____
- _____
- _____
- _____
- _____

Pronouns

Circle the pronoun that can replace the underlined words.

Zack and I went to dinner.

They

We

The tree was tall.

It

He

Proper Nouns

Circle the words that need capital letters.

jackson

ball

leaves

june

monday

lisa

ribbon

pens

october

glue

Prefixes

Circle the prefix in each word.

preface

unhelpful

mistake

review

mistreat

Sentence Construction


Correct the sentences below. Rewrite them correctly.

1. january an february arent hot months


1. _____

2. we went surfing in california

2. _____



Week 3: Day 3



Addition

Find the sums for each problem below.

$$\begin{array}{r} 423 \\ +289 \\ \hline \end{array}$$

$$\begin{array}{r} 52 \\ +54 \\ \hline \end{array}$$

$$\begin{array}{r} 31 \\ +47 \\ \hline \end{array}$$

Subtraction

Find the difference for each problem below.

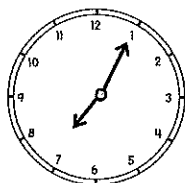
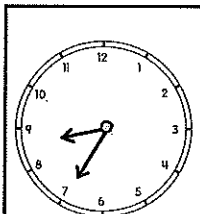
$$\begin{array}{r} 991 \\ -462 \\ \hline \end{array}$$

$$\begin{array}{r} 288 \\ -187 \\ \hline \end{array}$$

$$\begin{array}{r} 69 \\ -57 \\ \hline \end{array}$$

Time

Write the times shown on the clocks.



Counting

Fill in the missing numbers.

110, 210, ____, ____, 510

____, ____, 100, 105, ____

200, ____, 400, ____, ____

____, 110, ____, ____, 113

Money

Count the coins. Write your answer in the box.



Word Problem

Answer the problem below. Show your work.

Max caught 13 fish on Monday, 12 fish on Tuesday, and 14 fish on Wednesday. How many fish did he catch in all?

add

subtract

___ □ ___ □ ___ = ___

Graphing

Use the graph below to answer the questions.

	5	10	15	20	25
Beach	■	■	■	■	■
Camping	■				

- How many went to the beach? ____
- How many went camping? ____
- How many more went to the beach than camping? ____

Week 4: Day 1

Syllables

Put the words in the correct box.

flower jumping grandfather

computer ribbon paperclip

2 syllables

3 syllables

ABC Order

Put the 10 words in ABC Order.

ketchup	mustard
cheese	hotdog
tomato	pickles
hamburger	fries
chips	lettuce

1. _____
2. _____
3. _____
4. _____
5. _____
6. _____
7. _____
8. _____
9. _____
10. _____

Pronouns

Circle the pronoun that can replace the underlined words.

Did you catch the ball?

him

it

Kate and Matt run fast.

They

Them

Verbs

Circle the verbs (action words) below.

talked shirt

ate rolled

pancake shoes

blue eight

fan painted

Root Words

Circle the root words below.

walking

walk

hug

hugging

swim

swimming

touched

touch

type

typing

Sentence Construction


Correct the sentences below. Rewrite them correctly.

1. meg matt and julie at chips and hotdogs


1. _____

2. the boys went to burger king

2. _____



Week 4: Day 1



Addition

Find the sums for each problem below.

251	24	21
$+329$	$+34$	$+37$
$\underline{\hspace{2cm}}$	$\underline{\hspace{2cm}}$	$\underline{\hspace{2cm}}$

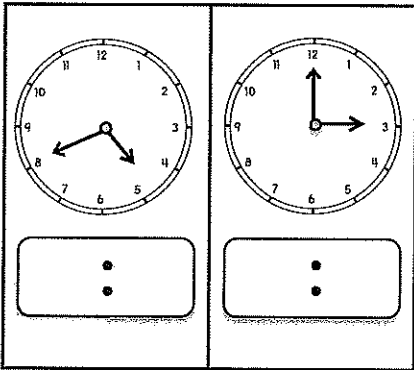
Subtraction

Find the difference for each problem below.

332	69	54
-233	-39	-28
$\underline{\hspace{2cm}}$	$\underline{\hspace{2cm}}$	$\underline{\hspace{2cm}}$

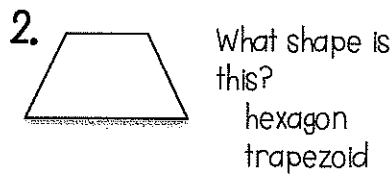

Time

Write the times shown on the clocks.



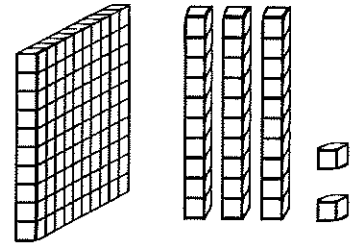
Shapes

Read the questions. Circle the answers for each question.



Place Value

Write the answer in expanded form.



$\underline{\hspace{2cm}} + \underline{\hspace{2cm}} = \underline{\hspace{2cm}}$

Word Problem

Answer the problem below. Show your work.

Zack had 12 hats. His brother gave him 12 more hats. How many hats does Zack have in all?

add

subtract


$\underline{\hspace{2cm}} \square \underline{\hspace{2cm}} = \underline{\hspace{2cm}}$

Fact Families

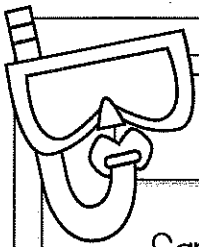

Using the numbers below, create a fact family.

30	64	34
------	------	------

$\underline{\hspace{2cm}} + \underline{\hspace{2cm}} = \underline{\hspace{2cm}}$
 $\underline{\hspace{2cm}} + \underline{\hspace{2cm}} = \underline{\hspace{2cm}}$
 $\underline{\hspace{2cm}} - \underline{\hspace{2cm}} = \underline{\hspace{2cm}}$
 $\underline{\hspace{2cm}} - \underline{\hspace{2cm}} = \underline{\hspace{2cm}}$



Week 4: Day 2



Reading Comprehension

Sam's favorite meal is breakfast. His favorite breakfast is eggs, pancakes, and bacon. Sometimes he eats cereal. Once a week, he eats grits and ham. He always drinks orange juice with his breakfast. The only thing he does not like is oatmeal. Sam thinks it is yuck. One time, his sister tried to trick him. She put a piece of cheese on top of oatmeal and told Sam that it was cheese grits. He took one bite and spit them out on the table. That was the only day that breakfast was not his favorite meal.



Read the story above. Use the story to answer the questions.

1. What is Sam's favorite meal? Why do you think that is his favorite meal?

2. What did Sam's sister do to trick him? How do you think Sam felt?

3. What would you do if you ate something you didn't like?

Sentence Construction


Correct the sentences below. Rewrite them correctly.

1. its cold in the hug house



1. _____

2. marks game is on october 4 2013

2. _____



Week 4: Day 2



Addition

Find the sums for each problem below.

$$\begin{array}{r} 2467 \\ +3241 \\ \hline \end{array}$$

$$\begin{array}{r} 4768 \\ +3803 \\ \hline \end{array}$$

Subtraction

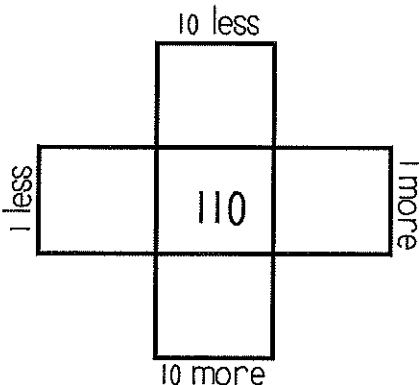
Find the difference for each problem below.

$$\begin{array}{r} 8500 \\ -4378 \\ \hline \end{array}$$

$$\begin{array}{r} 6450 \\ -2137 \\ \hline \end{array}$$

Multiples of 10

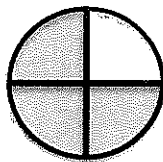
Write in the missing numbers.



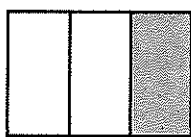
Fractions

Answer the questions about the fractions below.

1.



2.



Odd/Even

Circle the odd numbers.

- | | |
|----|----|
| 73 | 27 |
| 80 | 42 |
| 49 | 38 |
| 26 | 91 |

Word Problem

Answer the problem below. Show your work.

Jessica has 28 rings. She gave 13 to Meg. How many does she have now?

add

subtract

 =

Fact Families

Using the numbers below, create a fact family.

<input type="text"/>	<input type="text"/>	<input type="text"/>
----------------------	----------------------	----------------------

$35 + \underline{\quad} = 70$

$70 - \underline{\quad} = 35$

Week 4: Day 3

Dictionary Skills

Read the definitions. Decide which definition was used in the sentence.

bat

1. an object used to hit a ball(noun)
2. an animal that flies at night(noun)

He used the bat to hit the ball.

- Definition 1
- Definition 2

ABC Order

Put the 10 words in ABC Order.

farm	pig
horse	cow
chickens	duck
tractor	hen
field	barn

1. _____
2. _____
3. _____
4. _____
5. _____
6. _____
7. _____
8. _____
9. _____
10. _____

Pronouns

Circle the pronoun that can replace the underlined words.

The cows ate grass.

They

It

Did you see Meg?

she

her

Adjectives

Circle the words that are adjectives.

four

cool

running

band

pink

table

hard

light

bed

hammer

Compound Words

Circle the compound words below.

blackberry

computer

opened

peppermint

balloons

grasshopper

railroad

dresses

bedroom

airport

Sentence Construction

Correct the sentences below. Rewrite them correctly.



1. cant you call meg for me

1. _____

2. didnt you see the deer bears and snakes

2. _____

Week 4: Day 3



Addition

Find the sums for each problem below.

726	83	27
$+286$	$+24$	$+37$
□	□	□

Subtraction

Find the difference for each problem below.

630	72	70
-353	-46	-28
□	□	□

Time

Write the times shown on the clocks.

 □ : □	 □ : □
-----------	-----------

Counting

Fill in the missing numbers.

25, 30, ____, ____, 45

____, ____, 800, 900, ____

40, ____, 60, ____, ____

____, 102, ____, ____, 105

Money

Count the coins. Write your answer in the box.

	□
	□

Word Problem

Answer the problem below. Show your work.

Cam cooked 6 eggs and shared them with 2 friends. How many eggs did each friend get?



Graphing

Use the graph below to answer the questions.

	3	6	9	12	15
Cats					
Dogs					

- How many chose cats? ____
- How many more chose dogs than cats? ____
- How many voted in all? ____

Week 5: Day 1



Syllables

Put the 6 words in the correct box.

Kristen Angela Bobby
Jeremy Jennifer Steven

2 syllables

3 syllables

ABC Order

Put the 10 words in ABC Order.

triangle	cube
square	rectangle
circle	cylinder
pyramid	trapezoid
octagon	shape

- _____
- _____
- _____
- _____
- _____
- _____
- _____
- _____
- _____
- _____

Articles

Circle the article that can be used to complete the sentence.

_____ cow drank water.

The

An

I want to eat _____
apple.

a

an

Nouns

Find the people, places, and things.

cows

blue

friends

yawned

pencil

markers

skipped

found

plates

bread

Suffixes

Circle the suffix in each word.

excitable

inventor

careless

happily

translator

Sentence Construction

Correct the sentences below. Rewrite them correctly.



1. tomorrow is august 9 2013

1. _____

2. the mans dog swam in the river

2. _____

Week 5: Day 1



Addition

Find the sums for each problem below.

$$\begin{array}{r} 520 \\ +399 \\ \hline \end{array}$$

$$\begin{array}{r} 41 \\ +48 \\ \hline \end{array}$$

$$\begin{array}{r} 70 \\ +19 \\ \hline \end{array}$$

Subtraction

Find the difference for each problem below.

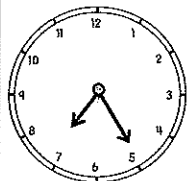
$$\begin{array}{r} 777 \\ -289 \\ \hline \end{array}$$

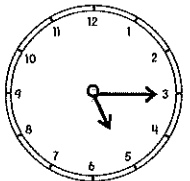
$$\begin{array}{r} 38 \\ -16 \\ \hline \end{array}$$

$$\begin{array}{r} 62 \\ -37 \\ \hline \end{array}$$

Time

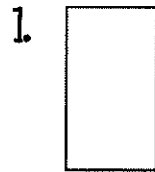
Write the times shown on the clocks.



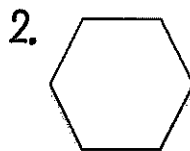


Shapes

Read the questions. Circle the answers for each question.



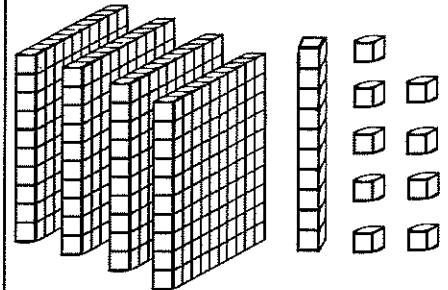
What shape is this?



What shape is this?

Place Value

Write the answer in expanded form.



_____ + _____ = _____

Word Problem

Answer the problem below. Show your work.

Jessica picked 32 flowers. She gave some away. She has 18 left. How many did she give away?

add

subtract

_____ _____ _____ = _____

Fact Families

Using the numbers below, create a fact family.

24

11

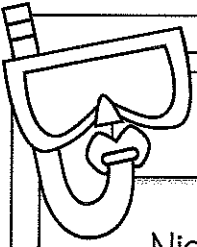


13

_____ + _____ = _____

_____ + _____ = _____

_____ - _____ = _____

_____ - _____ = _____



Reading Comprehension

Nick, Max, and Tim wanted to make pizza for dinner. First, they went to the store and bought the items they needed. Next, Nick and Max rolled out the dough on a pan. Then, Tim put on sauce, cheese, and pepperoni. After that, they put the pizza in the oven and waited for the pizza to cook. Finally, they pulled the pizza out of the oven, put it on their plates, and ate it.



Read the story above. Use the story to answer the questions.

1. Write down the steps the kids took to make the pizza.

2. What do you think the kids did after they finished eating?

Sentence Construction


Correct the sentences below. Rewrite them correctly.

1. sue cat and bo ate at pizza hut



1.

2. cant you call fred and fran

2.



Week 5: Day 2



Addition

Find the sums for each problem below.

278

89

60

+333

+50

+49

Subtraction

Find the difference for each problem below.

800

59

42

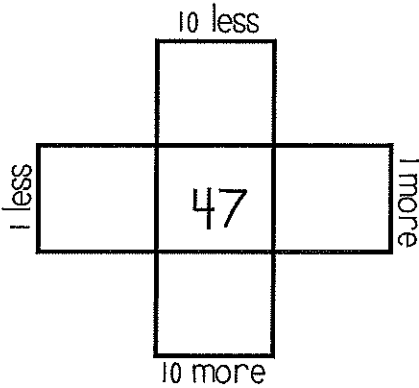
- 263

- 37

- 7

Multiples of 10

Write in the missing numbers.



True/False

Circle the problems below that are true.

- $5 + 9 = 18$
- $9 + 7 = 16$
- $9 + 9 = 18$
- $6 + 5 = 10$

Odd/Even

Circle the even numbers.

- | | |
|----|-----|
| 18 | 10 |
| 96 | 7 |
| 61 | 126 |
| 29 | 43 |

Word Problem

Answer the problem below. Show your work.

Nan has 26 flowers. She gave 12 to her sister. How many flowers does she have left?

add

subtract

=

Fact Families

Using the numbers below, create a fact family.

<input type="text"/>	<input type="text"/>	<input type="text"/>
----------------------	----------------------	----------------------

$14 + \underline{\quad} = 73$

$14 + 59 = \underline{\quad}$

$73 - \underline{\quad} = 59$

$\underline{\quad} - 59 = 14$

Week 5: Day 3

Dictionary Skills

Read the definitions. Decide which definition was used in the sentence.

trip

1. to go on a vacation(noun)
2. to fall over something(verb)

The family took a trip to the beach.

- Definition 1
- Definition 2

ABC Order

Put the 10 words in ABC Order.

pencil	book
desk	glue
stapler	crayons
paper	eraser
chalk	tape

1. _____
2. _____
3. _____
4. _____
5. _____
6. _____
7. _____
8. _____
9. _____
10. _____

Articles

Circle the article that can be used to complete the sentence.

She drew ____ ant.

a

an

Will he throw ____ ball?

the

an

Pronouns

Circle the words that are pronouns.

pen

them

clip

he

it

called

they

me

shorts

staple

Compound Words

Circle the compound words below.

seashore

winner

himself

matched

hurry

earring

earthquake

taken

closed

toothpick

Sentence Construction

Correct the sentences below. Rewrite them correctly.



1. who cooked zacks dinner

1. _____

2. sam fran and meg went to eat

2. _____

Week 5: Day 3



Addition

Find the sums for each problem below.

$$\begin{array}{r} 294 \\ +337 \\ \hline \end{array}$$

$$\begin{array}{r} 92 \\ +33 \\ \hline \end{array}$$

$$\begin{array}{r} 50 \\ +49 \\ \hline \end{array}$$

Subtraction

Find the difference for each problem below.

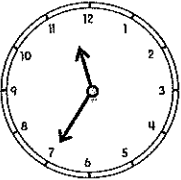
$$\begin{array}{r} 820 \\ -452 \\ \hline \end{array}$$

$$\begin{array}{r} 39 \\ -17 \\ \hline \end{array}$$


$$\begin{array}{r} 56 \\ -35 \\ \hline \end{array}$$

Time

Write the times shown on the clocks.



:



:

Counting

Fill in the missing numbers.

19, 20, ____, ____, 23, ____


____, ____, 300, 400, ____


40, ____, 50, ____, ____

____, 100, ____, ____, 103

Money

Count the coins. Write your answer in the box.





Word Problem

Answer the problem below. Show your work.

I have 13 pieces of gum, 14 pieces of chocolate, and 25 gummy bears. How many pieces of candy do I have in all?

add

subtract

_
□
_
□
=
_



Graphing

Use the graph below to answer the questions.

	1	2	3	4	5
Sausage					
Cheese					

1. How many kids chose sausage? ____
2. How many kids chose cheese? ____
3. How many voted in all? ____

Week 6: Day 1



Syllables

Put the 6 words in the correct box.

monkey window reminder
 paintbrush strawberry bicycle

2 syllables

3 syllables

ABC Order

Put the 10 words in ABC Order.

soccer	tennis
football	golf
basketball	hockey
baseball	karate
sports	running

1. _____
2. _____
3. _____
4. _____
5. _____
6. _____
7. _____
8. _____
9. _____
10. _____

Articles

Circle the article that can be used to complete the sentence.

___ birds flew in the sky.

The

A

The team ate ___ pizzas.

the

a

Nouns

Find the people, places, and things.

sister

an

white

glasses

nose

fingers

green

socks

draws

phone

Root Words

Circle the root words below.

cry

crying

counted

count

talking

talk

edit

editing

eaten

eat

Sentence Construction

Correct the sentences below. Rewrite them correctly.



1. tim asked can you bring me water

1. _____

2. mike said ben threw the football

2. _____

Week 6: Day 1



Addition

Find the sums for each problem below.

$$\begin{array}{r} 5367 \\ + 2834 \\ \hline \end{array}$$

$$\begin{array}{r} 2035 \\ + 3744 \\ \hline \end{array}$$

Subtraction

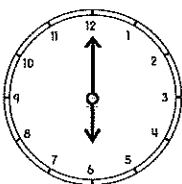
Find the difference for each problem below.

$$\begin{array}{r} 7490 \\ - 1481 \\ \hline \end{array}$$

$$\begin{array}{r} 8875 \\ - 2657 \\ \hline \end{array}$$

Time


Write the times shown on the clocks.



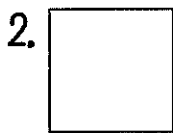


Shapes

Read the questions. Circle the answers for each question.




What shape is this?



What shape is this?

Place Value

Write the answer in expanded form.



+ _____ = _____

Word Problem

Answer the problem below. Show your work.

Kim has 34 coins. She gave 16 of them to Molly. How many does she have left?

add

subtract

_____ □ _____ = _____

Fact Families

Using the numbers below, create a fact family.

39

52

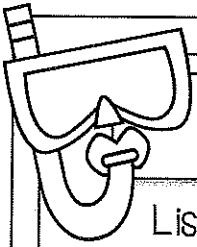


91

_____ + _____ = _____

_____ + _____ = _____


_____ - _____ = _____

_____ - _____ = _____



Reading Comprehension

Lisa wants to go outside to play, but it is very cold. She puts on her coat, mittens, hat, and boots. Then, she runs out the door. There is snow everywhere. Lisa's friend Grace comes over to play. They decide they want to build a huge snowman. First, they roll the snow into three big balls. Then, they stacked the balls up and put sticks, eyes, a nose, and a hat on the snowman. When they finished building the snowman, the girls were cold. They went in Lisa's house and sat next to the fire. The girls had a fun, cold day.



Read the story above. Use the story to answer the questions.

1. What does Lisa have to do before she can build the snowman?

2. What would you do if you saw a lot of snow?

3. What steps did the girls take to build the snowman?

Sentence Construction


Correct the sentences below. Rewrite them correctly.


1. i left mine book papers and pen at home

1. _____


2. didnt matt ride the horse

2. _____





Week 6: Day 2



Addition

Find the sums for each problem below.

430	36	51
$+259$	$+54$	$+28$
<input type="text"/>	<input type="text"/>	<input type="text"/>

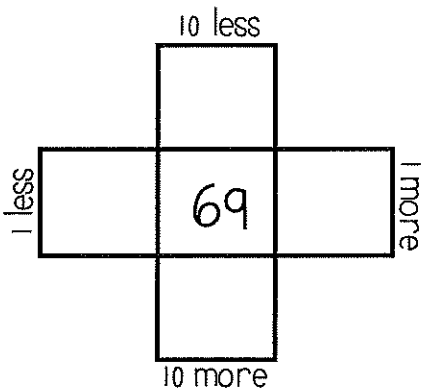
Subtraction

Find the difference for each problem below.

560	49	63
-353	-28	-34
<input type="text"/>	<input type="text"/>	<input type="text"/>

Multiples of 10

Write in the missing numbers.



True/False

Circle the problems below that are true.

- $9+7 = 17$
- $8+7 = 15$
- $9+4 = 12$
- $10+10 = 20$

Odd/Even

Circle the odd numbers.

- | | |
|-------|-------|
| 32 | 83 |
| 132 | 99 |
| 95 | 124 |
| 47 | 60 |

Word Problem

Answer the problem below. Show your work.

Matt had 16 coins. He shared them with 4 friends. How many coins did each friend get?

Fact Families

Using the numbers below, create a fact family.



$$9 + \underline{\quad} = 15$$

$$6 + 9 = \underline{\quad}$$

$$15 - \underline{\quad} = 9$$

$$\underline{\quad} - 9 = 6$$

Dictionary Skills

Read the definitions. Decide which definition was used in the sentence.

bowl

1. an object used hold food(noun)
2. roll a ball along the ground(verb)

Pour the cereal in a bowl.

- Definition 1
- Definition 2

ABC Order

Put the 10 words in ABC Order.

ocean	seaweed
fish	clams
dolphin	whale
shark	oyster
reef	mussels

1. _____
2. _____
3. _____
4. _____
5. _____
6. _____
7. _____
8. _____
9. _____
10. _____

Articles

Circle the article that can be used to complete the sentence.

She ate ____ biscuit.

a

an

____ girls played cards.

A

The

Pronouns

Circle the words that are pronouns.

her

I

the

beard

them

him

dots

talks

you

we

Irregular Plurals

Circle the irregular plural nouns.

foot

feet

teeth

tooth

children

child

man

men

mouse

mice

Sentence Construction

Correct the sentences below. Rewrite them correctly.



1. the squirrel clumbed the tree

1. _____

2. what is your favorite food tim asked

2. _____

Week 6: Day 3



Addition

Find the sums for each problem below.

$$\begin{array}{r} 294 \\ +286 \\ \hline \end{array}$$

$$\begin{array}{r} 51 \\ +37 \\ \hline \end{array}$$

$$\begin{array}{r} 32 \\ +36 \\ \hline \end{array}$$

Subtraction

Find the difference for each problem below.

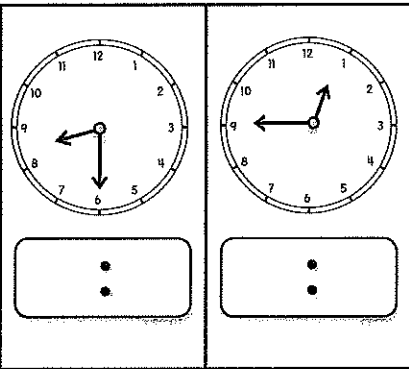
$$\begin{array}{r} 488 \\ -208 \\ \hline \end{array}$$

$$\begin{array}{r} 60 \\ -53 \\ \hline \end{array}$$

$$\begin{array}{r} 79 \\ -47 \\ \hline \end{array}$$

Time

Write the times shown on the clocks.



Counting

Fill in the missing numbers.

500, 510, _____, _____, _____

_____, _____, 80, 85, _____

190, _____, 210, _____, _____

_____, 99, _____, _____, 102

Money

Count the coins. Write your answer in the box.



Word Problem

Answer the problem below. Show your work.

My brother ate 14 French fries, 6 chicken fingers, and 2 ice creams.
How much did he eat in all?

add

subtract

$$\square + \square = \square$$

Graphing

Use the graph below to answer the questions.

	2	4	6	8	10
Cookies					
Cake					

- How many more chose cake than cookies? _____
- How many kids chose cookies? _____
- How many voted in all? _____

Parent Letter for Summer Reading

Dear Parents,

This packet is designed to help your child retain what they have learned in second grade during Reading. This is a separate packet from the skills practice packet you have received.

In this packet, there are four reading passages with focus questions for your child to complete after completing the language arts and math skills pages for the week.

There is also a reading log included in this packet. Your child is encouraged to read a book of their choosing for 15-20 minutes a day. They can record their time spent reading each day on the reading log. There are also guidelines for "What is a JUST RIGHT Book" included in this packet along with four bookmark lists of book recommendations

Summer is a great time for recreational reading and exploring new books. Students are encouraged to pick up a good book and to enjoy! Students may also enjoy reading with a family member and sharing the experience!

On Book Day, please have your child return the completed reading log and the packet to their 3rd grade homeroom teacher.

Thank you for your involvement and support of your child's education.


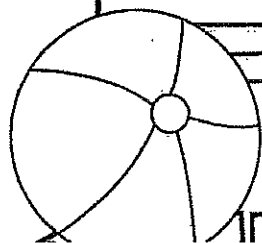
Have a great summer!
Third Grade Teachers


What is a JUST RIGHT book?

- I read my book **smoothly**. (I do not sound like a robot. I sound like someone talking).
- I read with **accuracy** (I do not make too many errors)
- I am **comprehending** what I am reading. (I understand what is happening in the story and where it is headed).
- I am in the **reading zone**. (I am completely immersed in my book, not thinking about something else, and not easily distracted).
- I am constantly **thinking** about what I am reading, asking questions, and making predictions.

Reading Log

Date:	Name of Book	Time Read






My Just Right Books

- Magic Tree House
- Junie B. Jones
- Judy Moody
- Heidi Heckelbeck
- Jigsaw Jones
- Bailey School Kids
- Flat Stanley
- Ivy and Bean
- The Zack Files
- Martha Speaks
- Rainbow Fairies
- Polk Street School
- Russell Sprouts
- Jenny Archer
- Marvin Redpost
- Notebook of Doom
- The Littles
- Kylie Jean



M




My Just Right Books

- Secrets of Droon
- A to Z Mysteries
- Encyclopedia Brown
- Katie Kazoo
- Ramona the Brave
- Frankly Frannie
- Franny K. Stein
- Puppy Place
- Amber Brown
- Pony Pals
- Nancy Drew
- Beast Quest
- Jake Drake
- My Father's Dragon
- Babysitters Club
- Boxcar Children
- Stella Batts
- Magic Bone

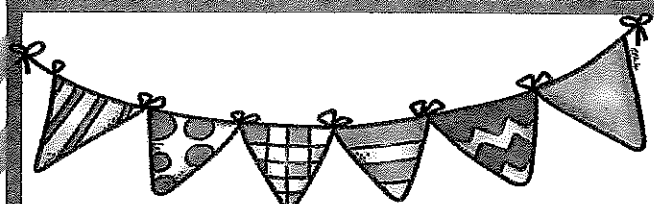



N/O



My Just Right Books

- Clementine
- Time Warp Trio
- Sideways Stories
- Dragonslayers
- Bad Kitty series
- Wayside School
- Magic School Bus
- HollyWebb(author)
- Dragon Masters
- Sophie the Snoop
- Captain Underpants



My Just Right Books

- Author: Roald Dahl
- Hank the Cowdog
- Humphrey
- Bunnicula
- Little House
- Hank Zipzer
- Goosebumps
- Alvin Ho series
- Dragonquest series
- Superfudge(Blume)
- I Survived series
- Anastasia Krupnik
- Thornton Burgess animal series



POOL DAYS

Christina and her brother David loved going to the pool. They each had a swim noodle. Christina's was purple, and David's was green. They packed towels, their favorite snack, and drove to the pool with their mom.

At the pool, they said hello to the lifeguard. A lifeguard watches the pool to make sure everyone is safe in the water. If someone is having trouble swimming, the lifeguard will jump in and save him or her.

David and Christina put on sunscreen to protect themselves from getting a sunburn. They raced each other in the pool with their swim noodles. They played tag, Marco Polo, and tried to steal each other's swim noodles. When they got tired, they laid out in the sun.

David and Christina's mom called them over to drink some water and have a snack. When you are in the sun for a long time, it is important to drink water. This will keep you from getting dehydrated or not having enough water in your body.



After they finished their snacks, David and Christina were ready for some more pool day fun!

Name: _____

DIG INTO TEXT



Answer the following questions by digging deep into the text.

☆ Don't forget to highlight or underline where you found the answer!

☆ Don't forget to write in complete sentences!

1) What colors were Christina and David's pool noodles?

2) What does a *lifeguard* do?


3) What games did Christina and David play?

4) What does the word *dehydrated* mean?

JULY 4th

The Fourth of July is also known as Independence Day. It is a very important holiday that we in America celebrate. The Fourth of July is more than fireworks, hotdogs, and picnics. It signifies or means something more important.

Around 200 years ago, our country was part of Britain, which is a country in Europe. The people in America were tired of paying taxes or money to Britain. They did not like that Britain was telling them what to do. The Americans had to come up with a plan and fast!




The Americans decided to write The Declaration of Independence. The Declaration of Independence was a document or letter that a group of men wrote. In this letter, fifty-six important men wrote and signed that they no longer wanted to be ruled by Britain. The people in America wanted to be free and make their own rules.

The Americans were brave and wanted a better future for themselves and their children. We are free today, because of the brave men that stood up for America!

Name: _____

DIG INTO TEXT



Answer the following questions by digging deep into the text.

☆ Don't forget to highlight or underline where you found the answer!

☆ Don't forget to write in complete sentences!

1) What is the 4th of July also known as?

2) What does the word *signifies* mean?

3) Why did the Americans not like Britain?

4) What is the Declaration of Independence?

• • • • •

THE SECRET SUMMER SPOT

Mark and his brother Ben were looking for summer quests or adventures. They explored the backyard and found a secret spot. It was near the Weeping Willow tree, which was planted near a small pond.



The tree is called a Weeping Willow because the branches droop down. This makes the tree look like it is crying. Inside the drooping branches and leaves, was a tire swing. Mark and Ben were so excited to find their own secret spot! They began to think of all the great adventures they could have there!

In no time, they began to explore. They climbed the branches, swung on the tire swing, and jumped into the little pond. They were soaking wet! As they dried off near the pond, they watched the ducks swim in the pond, listened to the birds chirp, and followed the little turtles.

From under the weeping willow tree, Mark and Ben were protected from the summer sun. Everyday they went back to their secret summer spot to find more adventures.

Name: _____

DIG INTO TEXT



Answer the following questions by digging deep into the text.

☆ Don't forget to highlight or underline where you found the answer!

☆ Don't forget to write in complete sentences!

1) What is a *quest*?

2) Where did Mark and Ben find their secret summer spot?

3) How did the Weeping Willow get its name?


4) What are some things Mark and Ben did at their secret spot?

FIREWORKS FOR THE FIRST TIME

Mary and her family went to Florida for summer vacation. It was the 4th of July weekend. Mary sat on a towel with her mom, dad, and two younger brothers. The sand was still warm from the hot, afternoon sun. Many people were also on the beach. Everyone was waiting for the sun to go down and the firework show to start.

Mary was excited to see her first firework show. Mary's parents told her the first fireworks were made in China. Fireworks were used for celebrations. On the 4th of July, fireworks were used to celebrate the birthday of the United States of America. It was the day of Independence or freedom. It is when America became a country.

Mary looked at the ocean and spotted a boat! Inside were people who knew how to shoot fireworks, called experts. In no time, the sky became dark and the crowd started to cheer. Whoosh! Pop! Bang! One by one the fireworks started to go off. "Happy birthday America," said Mary.



Name: _____

DIG INTO TEXT



Answer the following questions by digging deep into the text.

☆ Don't forget to highlight or underline where you found the answer!

☆ Don't forget to write in complete sentences!

1) Why were so many people on the beach?

2) Why was Mary excited?

3) Where were the first fireworks made?

4) What is another word for independence?
